



**INDIAN SCHOOL SOHAR**  
**TERM –II EXAM (2023-24)**  
**SUBJECT: SOCIAL SCIENCE**  
**CLASS- V**  
**SET –B**

**Date of Exam: 10-03-2024**

**Time Allotted: 2 hours**

**Max. Marks: 40**

(Note: This question paper consists of 3 printed pages. Please check that you have all the pages.)

---

**Q1. Choose the correct option:**

**(1× 5=5)**

i. Rahul wants to monitor the health of his heart. Which of the following is the most appropriate option his doctor would first recommend him for?

A) Electro Encephalo Gram

B) Electro Cardio Gram

C) MRI Scanning

D) LASER surgery

ii. The Industrial Revolution first started in \_\_\_\_\_.

A) Germany

B) United States of America

C) Russia

D) England

iii. Vasco da Gama was the first European to discover the sea route to India. Which year did he land in India?

A) 1496

B) 1497

C) 1498

D) 1499

iv. Identify the correct match from the options given below.

A) Antibiotic - Joseph Lister

B) Clinical thermometer - Wilhelm K Roentgen

C) Anti-smallpox vaccine - Edward Jenner

D) X-Ray - Gabriel Daniel Fahrenheit

v. The full form of ECOSOC is \_\_\_\_\_.

A) Economic and Social Council

B) Economic Cultural and Social Cooperation

C) Economic and Social Cooperation

D) Economic Cultural and Social Council

**Q2. Answer the following in a word or a sentence:**

**(1× 3=3)**

i. The process of cleaning surgical instruments in boiling water to make them free from germs.

ii. The unjust law which said that if a king died without a natural heir, his kingdom would be taken over by the British.

iii. Complete the analogy.

\_\_\_\_\_ : Largest body of the UN :: Security Council : Most powerful organ of the UN.

**Q3. Study the two statements marked as Assertion (A) and Reason (R). Choose the correct answer from the options given below:**

**(1× 2=2)**

- A) Both Assertion(A) and Reason(R) are true and Reason(R) is the correct explanation of Assertion(A).
- B) Both Assertion(A) and Reason(R) are true and Reason(R) is not the correct explanation of Assertion(A).
- C) Assertion(A) is true but Reason(R) is false.
- D) Assertion(A) is false but Reason(R) is true.

i. **Assertion:** The International Court of Justice is also called the world court.

**Reason:** It has 15 judges elected for a term of 9 years.

ii. **Assertion:** We should keep ourselves and our surroundings clean.

**Reason:** We can control the spread of diseases.

**Q4. Give reasons for the following: (Write two points for each)**


**(2× 2=4)**

- i. The Indians lost the revolt of 1857.
- ii. Louis Pasteur can be regarded as one of the founders of modern healthcare.

**Q5. Answer the following in short:**

**(2× 4=8)**

i. Observe the picture given below and answer the following questions.


 <p>Agra Fort – A monument listed as World Heritage Site</p>	<ul style="list-style-type: none"><li>a. Which agency of the United Nations does this picture depict?</li><li>b. Where is the headquarters of that agency?</li><li>c. Write one function of that agency.</li></ul>
---	--

ii. In 1600, a group of merchants of England took permission to form a company to trade in India.

- a. What was the name of that company?
- b. Name the queen of England who gave permission to form that company.

iii. Name any four countries that have received the veto power of the United Nations.


iv. Observe the picture given and answer the following questions.

	<ul style="list-style-type: none"><li>a. Identify this medical instrument.</li><li>b. Who invented this medical instrument?</li><li>c. What is it used for?</li></ul>
---	---

**Q6. Answer the following questions:**

**(3× 4=12)**

i.



- a. How is Antonio Guterres related to the United Nations?
- b. Write any two points about his roles and responsibilities in the United Nations.

ii. Mention any three important developments in the field of surgery.

iii. Which battle made the British powerful in Bengal? Write two reasons for that battle.

iv. Identify the agencies of the UN which came to help in the following situations. Write one function of that agency other than the one given below.

- a. This agency of the UN worked with member countries in facilitating research and coordinating vaccine development and distribution during COVID – 19.
- b. This agency of the UN helped to improve farming methods and changed the desert area of Rajasthan into a fertile land.

**Q7. Read the passage and answer the following questions:**

**(1× 3=3)**

i. In 1941, the Atlantic Charter was signed to work towards an effective system to maintain world peace and cooperation. After a year, four of the allies agreed to form this organisation called United Nations. Thus, the United Nations was founded with 50 members.

- a. Name the two leaders who signed the Atlantic charter.
- b. When was the United Nations founded?
- c. Describe the flag of the United Nations.

**Q8. Identify and mark the following places on a blank political map of India:**

**( $\frac{1}{2}$ × 6=3)**

- i. Two places of French trading centres.
- ii. The place where Vasco da Gama first landed in India.
- iii. The place where the revolt of 1857 started.
- iv. Two places of British trading centres.

\*\*\*\*\*